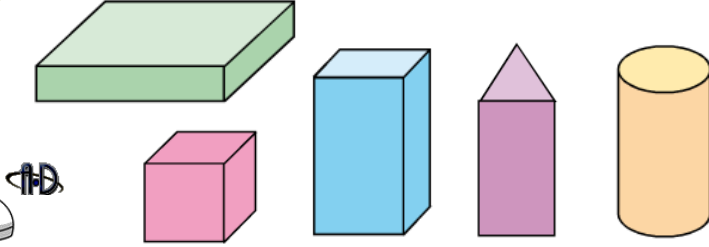
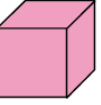
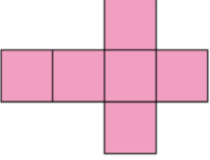
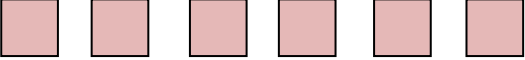
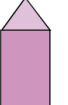
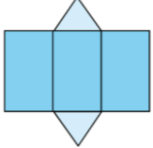
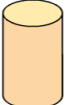
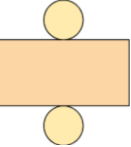


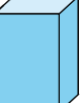



DÜZLEMSEL ŞEKİLLER



Aşağıdaki geometrik şekillerin açılımı verilmiştir. Siz de örnekte olduğu gibi açılımı verilen şekillerin düzlemsel parçalarını yanlarına çiziniz.



Geometrik Şekil	Geometrik Şeklin Açılımı	Geometrik Şekli Oluşturan Düzlemsel Parçaları
 Küp		
 Üçgen Prizma		
 Silindir		
 Dikdörtgen Prizma		
 Kare Prizma		

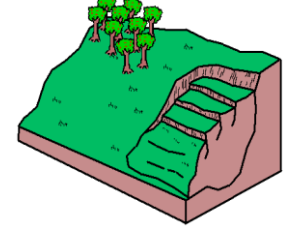
DOĞAL AFETLER



Arkadaşlar, aşağıdaki doğal afetlerin isimlerini altlarına yazalım.



.....



.....



.....



.....



.....



.....



.....



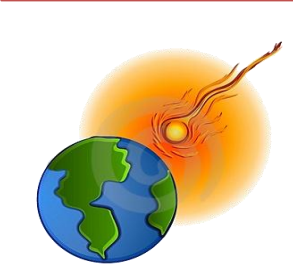
.....



.....



.....



.....